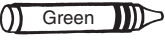



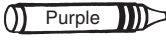

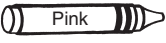

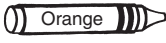



NAME _____

Divide by 10s!

- 1 Solve the equations.
- 2 Use the answers to find out what color to use in each space.

1 	2 	3 	4 	5 
6 	7 	8 	9 	10 

60 ÷ 10 = ___

30 ÷ 10 = ___

10 ÷ 10 = ___

50 ÷ 10 = ___

10 ÷ 10 = ___

40 ÷ 10 = ___

70 ÷ 10 = ___

20 ÷ 10 = ___

80 ÷ 10 = ___

90 ÷ 10 = ___

100 ÷ 10 = ___